


# MATEMATIKA



SANJA GRUJIĆ PIETR



17.12. 2019.



**CHASE**



**MARSHALL**


**PSEČA  
PATROLA**



**RUBBLE**




**SKYE**



$$5 - 1 = 4$$

5 MANJE 1 JE 4 .

5 MINUS 1 JE JEDNAKO 4 .

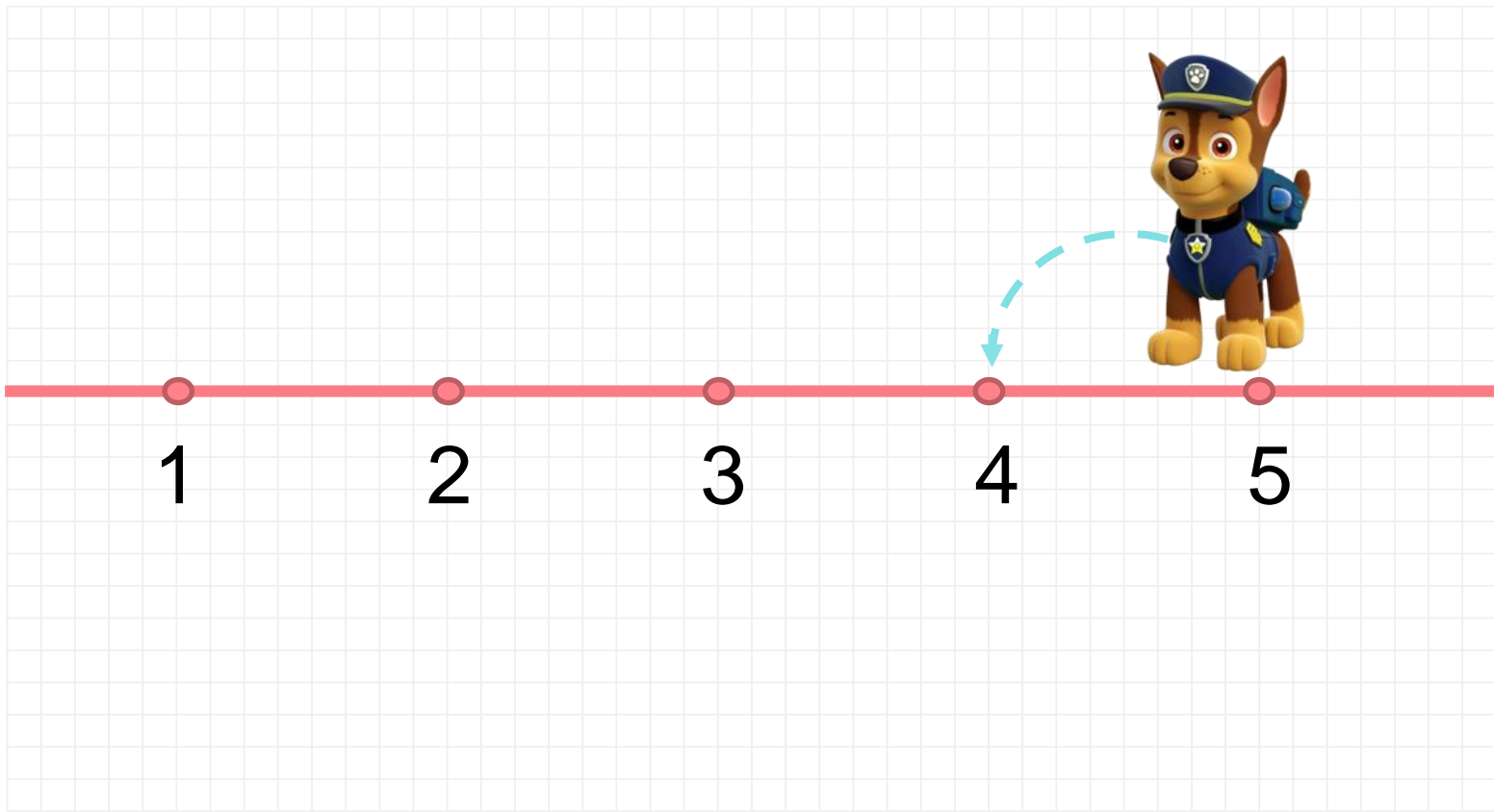


$$4 - 2 = 2$$

4 MANJE 2 JE 2.

4 MINUS 2 JE JEDNAKO 2.







1


2

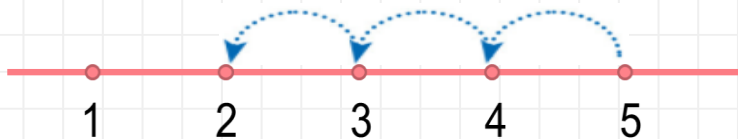
3

4

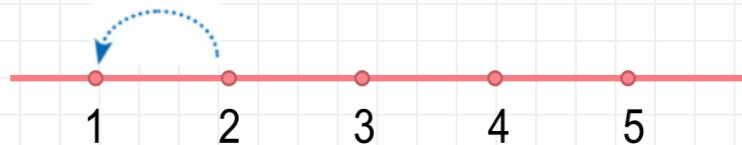
5



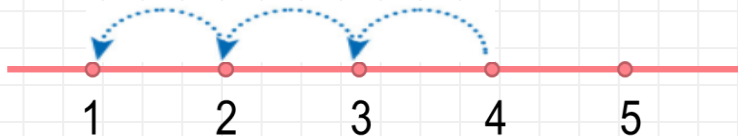
NACRTAJ  . IZRAČUNAJ.



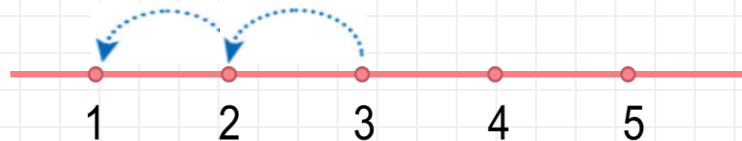
$$5 - 3 = 2$$



$$2 - 1 = \boxed{1}$$



$$4 - 3 = \boxed{1}$$




$$3 - 2 = \boxed{1}$$






NACRTAJ I DOPUNI. OSMISLI SVOJ ZADATAK.



$$3 - 2 = 1$$




$$\square - \square = \square$$


3 MANJE 2 JE 1 .  $\square$  MANJE  $\square$  JE  $\square$  .



# PREKRIŽI I DOPUNI.




4 MINUS 1 JE JEDNAKO 3.



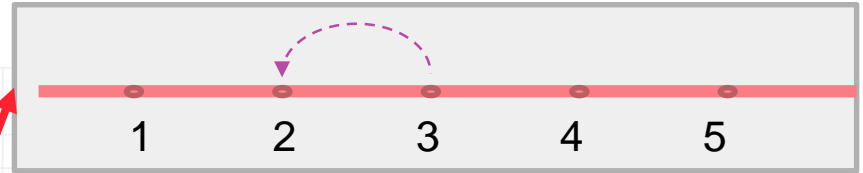
3 MINUS 1 JE JEDNAKO 2.



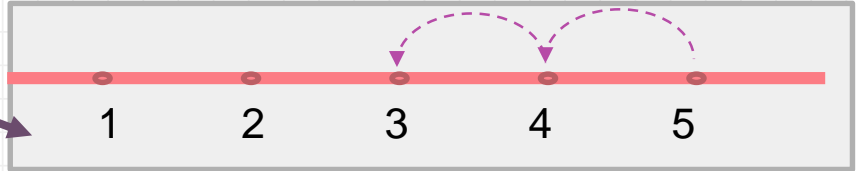
5 MINUS 4 JE JEDNAKO 1.



2 MINUS 1 JE JEDNAKO 1.



$$5 - 2 = 3$$



3 MINUS 1 JE JEDNAKO 2.

$$3 - 1 = 2$$

5 MINUS 2 JE JEDNAKO 3.

